

2022 年學而思盃
K2 年級 – 樣卷
2022 「*Think Mathematics Competition*」
K2- Sample Paper

學生姓名(Student Name) : _____ 分數(Marks) : _____/60

注意事項

- 1) 本次比賽分為甲、乙、丙三部分。甲部有 12 題，每題 2 分。乙部有 6 題，每題 4 分。丙部有 2 題，每題 6 分。比賽時間 40mins，共 20 題，滿分 60 分。
 - 2) 所有題目均為選擇題，請在答案框內選出正確答案，並圈出來。
 - 3) 請使用鉛筆、黑色原子筆或者藍色原子筆作答。
-

Instructions

- 1) The competition is divided into three parts: A, B and C. Section A: 1st to 12th Question (Each carries 2 marks) . Section B: 13th to 18th Question (Each carries 4 marks) . Section C: 19th to 20th Question (Each carries 6 marks) . The time is 40mins, with a total of 20 questions and a full score of 60 marks.
- 2) For each question, you will be asked to choose one answer from the options table . Circle ONE answer only.
- 3) Please use a pencil, black ballpoint pen, or blue ballpoint pen to answer.

甲部 – 第 1 題到第 12 題(共 12 題，每題 2 分，共 24 分)


Section A: 1st to 12th Question (Each carries 2 marks)


1) 求 $4+3$ 的值。

Find the value of $4+3$.

答案	3	4	5	6	7	8
answer						

2) 數出  的數量。

Count the number of  .



第 2 題

Question 2


答案	2	3	4	5	6	7
answer						

乙部 – 第 13 題到第 18 題(共 6 題，每題 4 分，共 24 分)

Section B: 13th to 18th Question (Each carries 4 marks)

3) 對比下面兩幅圖，找出不同之處的數量。

Compare the two images below and find the number of differences.



第 3 題

Question 3


答案	2	3	4	5	6	7
answer						

丙部 – 第 19 題到第 20 題(共 2 題，每題 6 分，共 12 分)

Section C: 19th to 20th Question (Each carries 6 marks)

4) 參考下圖，找出哪隻小動物的體重排第二。

Which animal's weight ranks second.



第 4 題

Question 4

答案	A	B	C	D
answer	A	B	C	D

~ 全卷完 ~

~ End of Paper ~